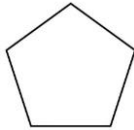




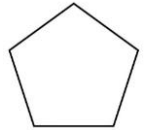
Maths: Speedy Six



- 1. $543 + 133 =$
- 2. Round 54 to the nearest 10 =
- 3. $98 \times 10 =$
- 4. $7 \times 4 =$
- 5. $356 - 224$
- 6. What is this shape?



- 1. $9443 + 833 =$
- 2. Round 354 to the nearest 10 =
- 3. $98 \times 10? =$
- 4. $44 \div 4 =$
- 5. What is the time 10 minutes before three o'clock?
- 6. What is this shape?



We are going to be starting our new Whole Class Reading book – *Swimming Against the Storm* – in the next 2 weeks so if you want to have your own copy, you will need to bring it into school next week.

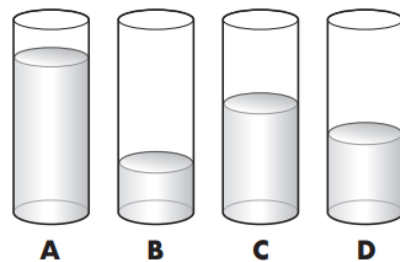
Reading Comprehension

Please complete the reading comprehension ‘Ancient Egypt’.

Spellings

- copier
- copied
- happier
- happiest
- cried
- replied

Optional Maths Extension
(1 housepoint if completed)



Sort the glasses from **least full** to **most full**.

least full
most full